




# Rekenchallenge dag 4


$$\text{Ice Cream Bar} \times \text{Ice Cream Bar} \times \text{Ice Cream Bar} = \text{Ice Cream Cone}$$


$$\text{Watermelon Slice} \times \text{Watermelon Slice} \times \text{Watermelon Slice} = 27$$


$$\text{Watermelon Slice} \times \text{Ice Cream Bar} \times \text{Watermelon Slice} = 18$$


$$\text{Ice Cream Cone} + \text{Ice Cream Cone} + \text{Ice Cream Cone} = ?$$

Hint: Start met de meloenijsjes